
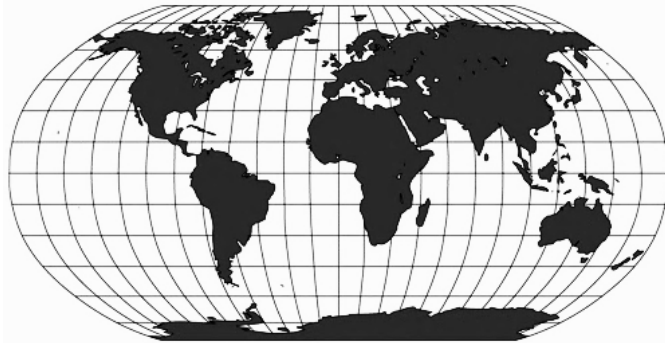


NAME: _____ Hour: _____

Latitude and Longitude



 Use your Global Grid notes to help you if you need to.

1-2. Name any two countries through which the Equator passes.

3-4. Name any two countries through which the Prime Meridian passes.

5-8. Statements 5-8 are all incorrect. Mark out the incorrect information and replace it with the correct information. (You do not need to rewrite the entire sentence. Just correct it.)

5. Longitude lines run parallel to the Equator.



6. Latitude lines tell us how far away a place is from the Prime Meridian.

7. Lines of latitude are all the same length.

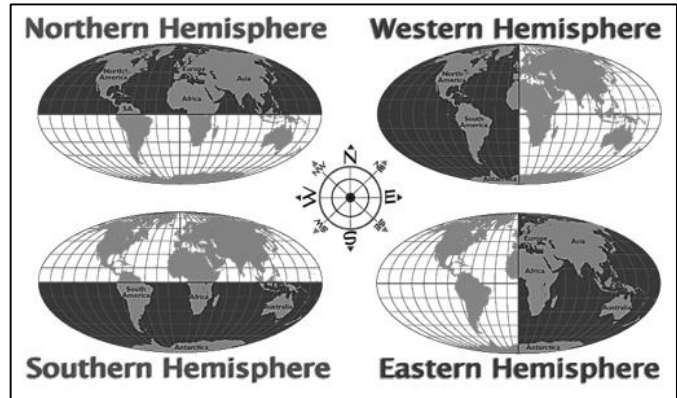
8. Lines of longitude get shorter the closer you get to the North Pole and South Pole.



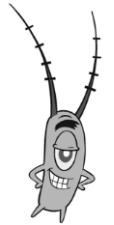
9. There is a specific way to write absolute location. Which absolute location is written in the correct form? **Circle the correct form.**

- ① 10'N 20'E ② 10°N 20°E ③ 20'E 10'N ④ 20°E 10°N

➤ The Prime Meridian and Equator divide the earth into hemispheres. Each location is in two hemispheres. **For example**, the United States is in the Northern Hemisphere **and** the Western Hemisphere.



10-15. In which **two** hemispheres are each of the following countries? Write the country names in the correct places on the chart.



Madagascar
Australia

Canada
Egypt

Brazil
China

16-21. Also, write in the correct continent for each country.

HEMISPHERES	COUNTRY	THAT COUNTRY'S CONTINENT
north & west	10	16
north & east	11	17
	12	18
south and west	13	19
south and east	14	20
	15	21



Good grief Mr.Krabs! It's really not hard!

?!?!?!?!

